


Gravity, Gears, and Review

Gravity


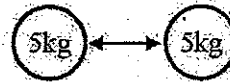
Gravity is a force that pulls any two masses towards each other. Nothing can stop gravity.

Gravity increases with mass.
 Less mass: less gravity



Heavier things have more gravitational force (weight) because they have more mass.

Gravity decreases with distance.
 Less distance: more gravity



As a spaceship gets closer to a planet, the gravity between the planet and the ship gets stronger.

More mass: more gravity



More distance: less gravity



Friction

Friction is a force that opposes moving objects and occurs any time objects touch. Friction causes heat and takes energy away from moving objects and machines.



The object and the table heat up as the two object rub against each other.

Rough surfaces have more friction than smooth surface.

An object must be touching something to have friction.



Air friction (air resistance) occurs when objects move thru air. Air friction increases with speed.



Friction can be helpful. A car uses the friction of its tires to turn corners.

<p>What is gravity? <i>Force that pulls objects together</i></p> <p>Does gravity increase or decrease? <input checked="" type="checkbox"/> If you increase the mass of one of the objects? <input type="checkbox"/> If you decrease the distance between the two objects? <input type="checkbox"/> If you decrease one of the masses? <input type="checkbox"/> If the objects are farther apart?</p> <p>If an object is not touching a table is there friction between them? <i>No, friction required contact</i></p> <p>What is another name for air friction? <i>air resistance</i></p> <p>Friction always causes what? <i>Heat</i></p> <p>For each pair of the objects, which has more inertia? A. A <u>height train</u> or a car? B. A ping pong ball or a <u>baseball</u>? C. A fast bowling ball or a slow bowling ball? <i>Same</i></p>	<p>Give an example of good friction: <i>Varies</i></p> <p>Give an example of bad friction: <i>Varies</i></p> <div style="text-align: center; margin: 10px 0;"> </div> <p>A. What is the normal force acting on the object? $F_w = mg = 8.5 \text{ kg} \cdot 10 \text{ m/s}^2 = 85 \text{ N} = F_w$</p> <p>B. How do static and kinetic friction compare? $F_s > F_k$</p> <p>C. Will this object start to move? <i>Yes</i></p> <p>D. Why? $20 \text{ N} > 15 \text{ N}$</p> <p>E. Calculate its acceleration. $F = ma \Rightarrow a = F/m$ $F_{\text{net}} = 12 \text{ N} \quad m = 8.5 \text{ kg} \quad \frac{12 \text{ N}}{8.5 \text{ kg}} = 1.4 \text{ m/s}^2$</p>
<p>Two very small people are pulling a box. Identify the four shown forces as F_{Applied}, T, F_w, F_n.</p> <p>A. <u>T</u> F_1 — the two men pulling WITH A ROPE. B. <u>F_w</u> F_2 — this force pushing up by the floor. C. <u>F_n</u> F_3 — the force pulling down on the mass. D. <u>F_f</u> F_4 — the force trying to stop the mass from moving. E. <u>F_f</u> Which force is in the negative x-direction? F. <u>F_w</u> Which force is in the positive y-direction? G. <u>T</u> Which force is in the positive x-direction? H. <u>F_w</u> Which force is in the negative y-direction? I. Which forces would be used in this equation: $\Sigma F_x = ma_x$? $F_w + F_n$ J. Which forces would be used in this equation: $\Sigma F_y = ma_y$? $T + F_f$</p> <div style="text-align: center; margin-top: 10px;"> </div>	

Balanced or unbalanced forces?

10 N left and 5 N right? If $a = 0$?

An object accelerating? If $\Delta y = 0$?

An object at constant speed? When an object turns a corner?

An object at rest?

Which has more inertia:

A 50 kg object or a 10 kg object?

A 30 kg object on the earth or in space? *Same*


A 20 kg object going 50 m/s, or a 30 kg object at rest.

Balanced or unbalanced forces? $F_{net} = 21 N$

Calculate the net force and acceleration of the object.

$F = ma$

$a = \frac{F}{m} = \frac{21 N}{3 kg} = 7 m/s^2$



What is the difference between mass and weight?

mass - amount of matter in an object

weight - g acting on mass

Which changes in space? *Weight*

Mass or Weight: $W = 20 N$; $M = 30 kg$?

Which falls faster: heavy or light objects?

Why? *Same speed*

g acts on all objects equally

A 4 kg object accelerates $12 m/s^2$ to the left, find the force on it.

$F = ma$

$F = 4 kg \cdot 12 m/s^2 = 48 N$

A 30 N net force pulls to the right on a 5 kg object. Find its acceleration: $F = ma$ $a = \frac{F}{m}$

Will it accelerate faster or slower?

If you increase an object's mass.

If you increase the force on the object.

Calculate the weight of a 12 kg object.

$F_w = mg$ $m = 12 kg$ $g = 10 m/s^2$

$F_w = 12 kg \cdot 10 m/s^2 = 120 N$

A 2 kg object is thrown into the air going 5 m/s.

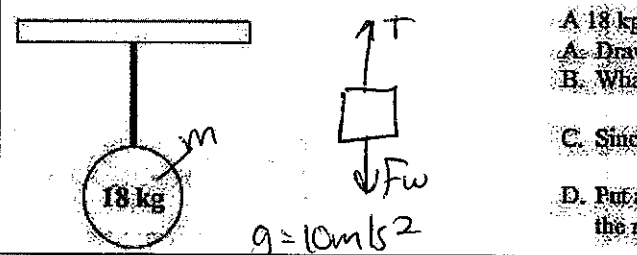
A. Is the object's initial velocity 0 or $-$?

B. Is the object's acceleration $+$ or $-$?

C. What is the force pulling down on the object (give a number).

$\approx -10 m/s^2$

Notice that an object can be moving the opposite way of the acceleration.



A 18 kg object is suspended by a rope.

A. Draw and label all of the forces acting on the object.

B. What is the weight of the object? $F_w = mg$

$18 kg \cdot 10 m/s^2 = 180 N$

C. Since it is hanging at rest, what is the acceleration of the object?

$0 m/s^2$

D. Put all of the above into $\Sigma F = ma$ and calculate the force exerted by the rope: $T - F_w = ma$ $T - 180 N = 18 kg \cdot 0 m/s^2 = 180 N$

Which has more inertia?

A) A 10 m/s car or a 20 m/s car?

B) A heavy rock or a light rock?

C) An astronaut on the earth or in space? *Same*

If there is friction on the table, draw and label all of the forces acting on the two masses to the left.

Balanced or unbalanced forces?

A) When an object is changing motion?

B) When an elevator starts to move up?

C) When an elevator is between floors?

D) When a car is using cruise control?

E) When a car is coming to a stop?

Suzie the slouch is sitting on the school bus. When the bus accelerates forward.

A. Which way does Suzie move relative to the bus? *Backward*

B. Which way does Suzie move relative to the ground? *Same place*

C. Which of Newton's Laws does this show? *1st - Inertia*

Does the force of gravity increase or decrease?

A. If you increase the distance between the objects?

B. If you decrease one of the masses?



An unbalanced or net force causes an object to change *Velocity* or *Direction*. (Use this for the next question.)

A car has three ways to accelerate. What are they?

Speed up

Slow down

change direction

If you need more help with the following, look at the table on the back of "Forces 5".

A. If you double the distance, by how much does the gravity change? *1/4*

B. If you triple one of the masses, by how much does the gravity change? *3x*

C. If you cut the distance to 1/2, by how much does the gravity change? *0.11*

Which of Newton's Laws applies?

A) A racing car needs to accelerate faster, so they make the car lighter.

B) You push your knuckles into a table and your knuckles start to hurt.

C) For a sky diver to fall thru the air at a constant speed, the force of gravity and the force of air friction must be equal.

What is Newton's First Law? *Inertia*

What is Newton's Second Law? $F = ma$

What is Newton's Third Law? *equal + opposite*

Which of Newton's Laws applies?

A. To walk forward your foot has to push backwards.

B. Your car will accelerate faster if you don't have extra weight in the trunk.

C. Without a seat belt, you would be launched forward if your car stops suddenly.